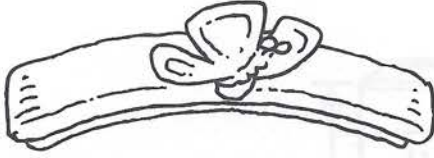


Measuring Length Using Non-Standard Units

Use connecting cubes and paper clips to measure each object.


1.



about 3 cubes long

about 2 paper clips long

2.



about _____ cubes long

about _____ paper clip long

3. How tall is the nickel?




(A) about 3 cubes

(B) about 1 cube

(C) about 2 paper clips

(D) about 3 paper clips

4. **Estimation** The paintbrush is about 5 paper clips long. How long is it in cubes? Estimate first. Then measure.



Estimate:

about _____ cubes long

Measure:

about _____ cubes long